

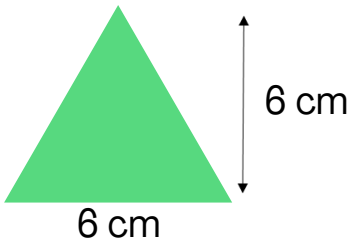
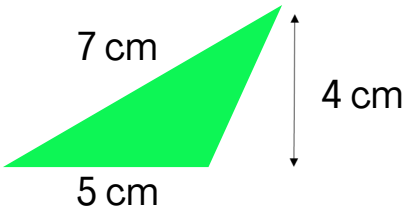

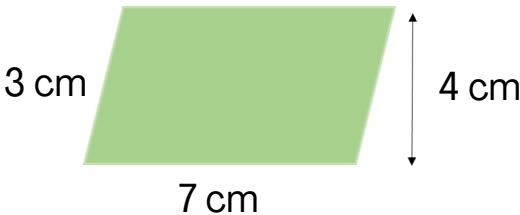
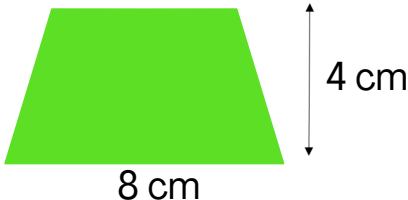
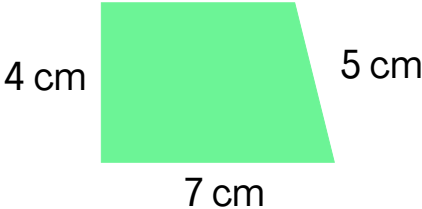


Name: \_\_\_\_\_

Date: \_\_\_\_\_

# AREA OF SHAPES

Calculate the area of the following shapes:

 <p>Area = _____ <math>\text{cm}^2</math></p>	 <p>Area = _____ <math>\text{cm}^2</math></p>
 <p>Area = _____ <math>\text{cm}^2</math></p>	 <p>Area = _____ <math>\text{cm}^2</math></p>
 <p>Area = _____ <math>\text{cm}^2</math></p>	 <p>Area = _____ <math>\text{cm}^2</math></p>
 <p>Area = _____ <math>\text{cm}^2</math></p>	 <p>Area = _____ <math>\text{cm}^2</math></p>

